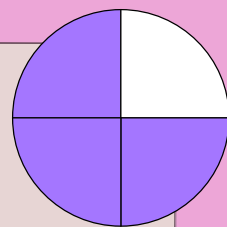


UŁAMKI PODSTAWOWE

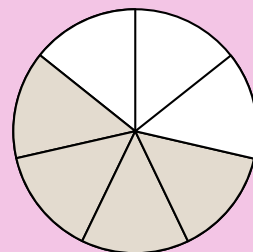
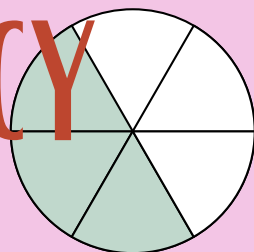

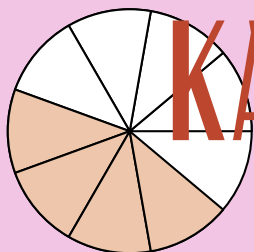
DWIE

PIĄTE



> 25 STRON

zapisz ułamek poniżej

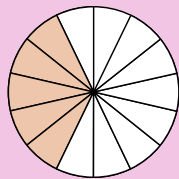
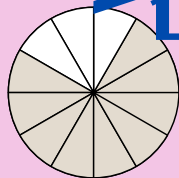
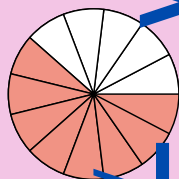
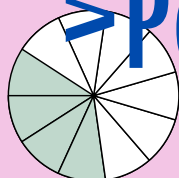


KARTA PRACY

→ ZAPISYWANIE UŁAMKÓW

> WIZUALIZACJA UŁAMKÓW
narysuj linie łącząc ułamki

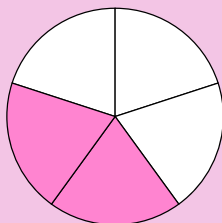
> PORÓWNYWANIE UŁAMKÓW



> OPERACJE NA UŁAMKACH

> ŁĄCZENIE RÓWNOWAŻNYCH

UŁAMKÓW



TRZY
CZWARTE

$\frac{8}{13}$
 $\frac{5}{14}$
 $\frac{4}{11}$
 $\frac{9}{12}$