
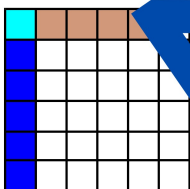


8



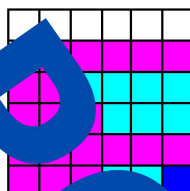
$$1 - \frac{5}{8} =$$

9




Zapisz liczbę mieszaną na ułamek niewłaściwy  $3\frac{2}{5} =$

10




$$5\frac{3}{16} - \frac{1}{16} =$$

11




Wyłącz całości  $\frac{4}{6} =$

12




$$Odcicz  $\frac{1}{2} + \frac{1}{2} =$$$

13



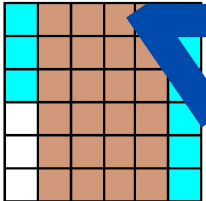
$$3\frac{3}{4} + 1\frac{1}{3} =$$

14




$$6\frac{4}{9} + 2\frac{7}{9} - 3\frac{5}{9} =$$

15



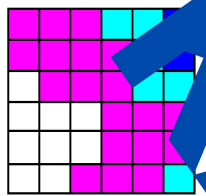
$$5\frac{3}{9} - 2\frac{1}{9} =$$

16




$$\frac{11}{13} - \frac{5}{13} =$$

17




Zapisz w postaci ułamka, jaka część godziny. Doprowadź zapisany ułamek do postaci nieskracalnej. -25 min.

18



$$4\frac{1}{2} - 2\frac{2}{5} =$$

19



$$1 - \frac{32}{33} =$$

